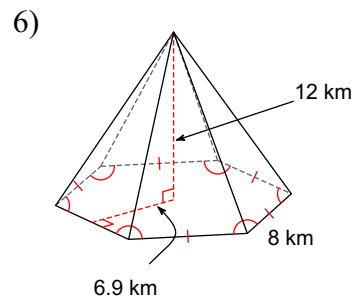
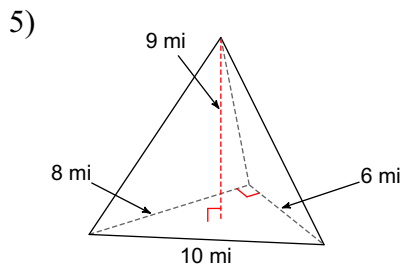
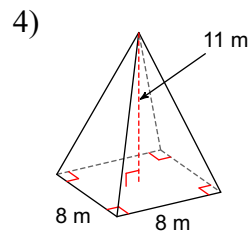
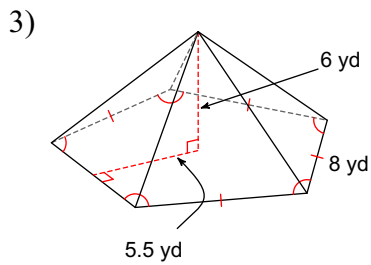
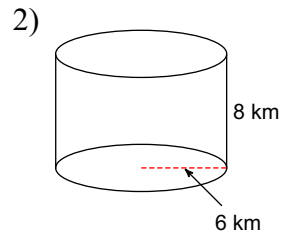
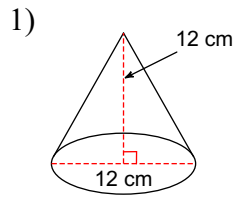
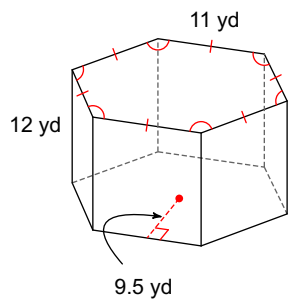


white board review

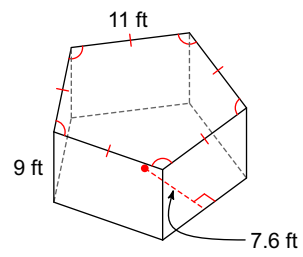
Find the volume of each figure. Round your answers to the nearest hundredth, if necessary.



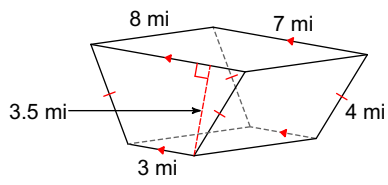
7)



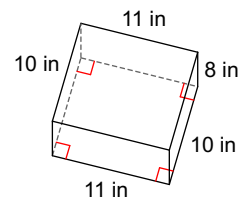
8)



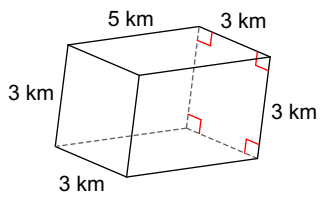
9)



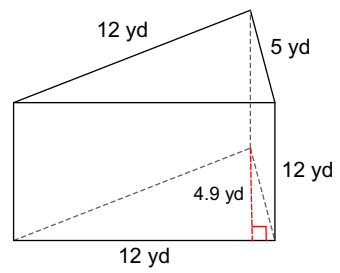
10)



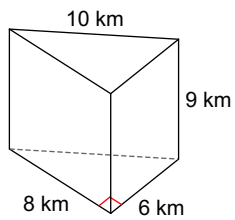
11)



12)



13)



Answers to white board review (ID: 1)

- 1) 452.39 cm^3
- 5) 72 mi^3
- 9) 140 mi^3
- 13) 216 km^3

- 2) 904.78 km^3
- 6) 662.4 km^3
- 10) 880 in^3

- 3) 220 yd^3
- 7) 3762 yd^3
- 11) 45 km^3

- 4) 234.67 m^3
- 8) 1881 ft^3
- 12) 352.8 yd^3